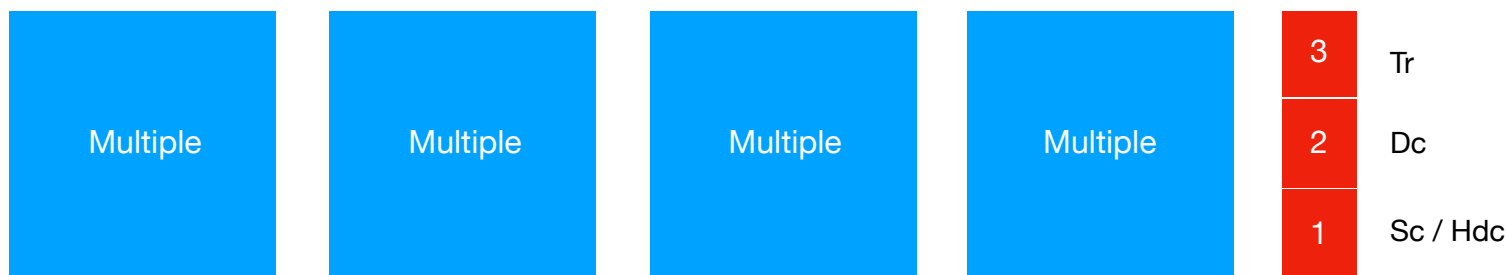



How Many Chains to Add at End of Multiples Worksheet

Stitch Used	Multiples that include first and last st in a row.	Where to Start	Multiple with first and last st of each row not included.	Where to Start
Single Crochet	Add 1	Start 2nd chain from hook.	Add 3	Start 2nd chain from hook. 1 stand alone sc on each side to put multiple in balance in between.
Half Double Crochet	Add 1	Start 3rd chain from hook. Ch skipped counts as first hdc.	Add 3	Start 3rd chain from hook. 1 stand alone hdc on each side.
Double Crochet	Add 2	Start 4th chain from hook. Ch skipped counts as first dc.	Add 4	Start 4th chain from hook. 1 stand alone dc on each side.
Treble Crochet	Add 3	Start 5th chain from hook. Ch skipped counts as first tr.	Add 5	Start 5th chain from hook. 1 stand alone tr on each side.

Example of Multiple Stitches



Multiples are in sets where each multiple is part of the first and last stitch.



First and last stitches are not included into the multiple but a stand alone edge.

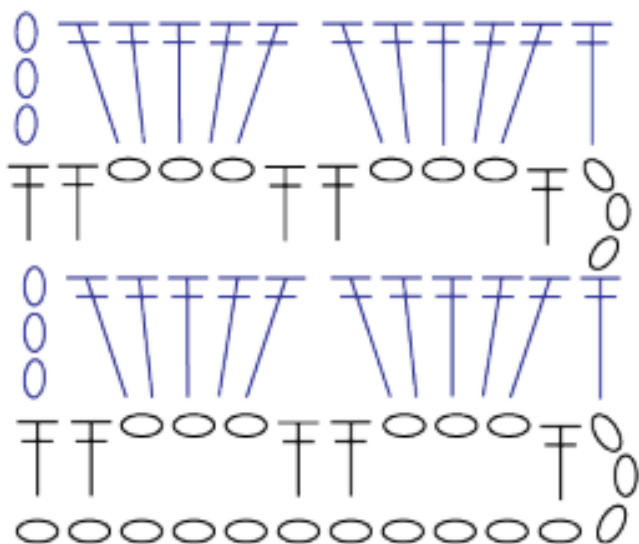


Diagram Example

Is this diagram showing with or without stand alone edges? _____

How many stitches are in the multiple for this diagram? _____

How many chains are left over that are not part of multiple = _____

What is the multiple for this diagram?

_____ + _____

This worksheet is designed to help crocheters figure out the multiples easier but also for them to understand how to set up their first chains to have the right chain count. To find multiples, it's easier to understand how to read a diagram and make them to figure it out. We have a comprehension tutorial on figuring out how to read and write crochet diagrams.



Diagram shows that it has stand alone edge. Answer is 5 sts per multiple. There are 4 sts left over. Pattern multiple is 5 + 4.